



$2 + 2 + 2$



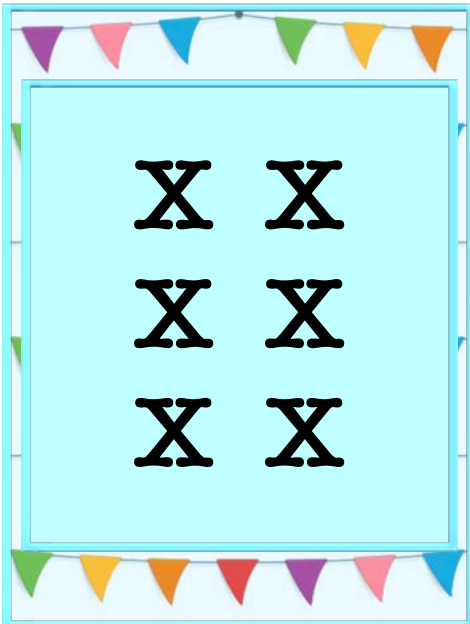
$3 + 3$




2×3




3×2




X X
X X
X X



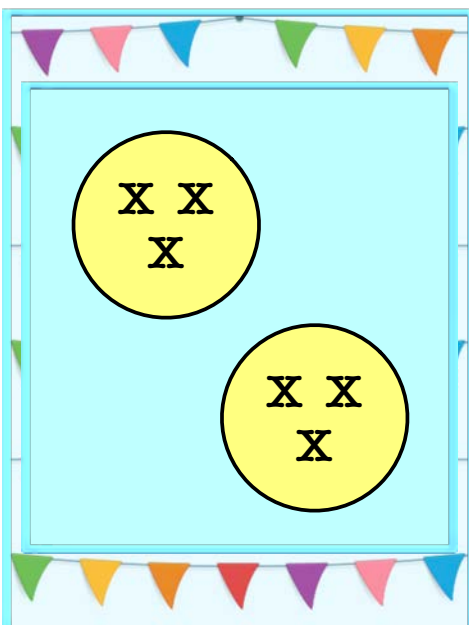
X X X
X X X



Three
groups
of two



Two
groups
of three



X X
X

X X
X



$$2 + 2 + 2 + 2$$

$$4 + 4$$

$$2 \times 4$$

$$4 \times 2$$

X X
X X
X X
X X

X X X X
X X X X

Four
groups
of two

Two
groups
of four

X X
X X

X X
X X



$$3 + 3 + 3 + 3$$

$$4 + 4 + 4$$

$$3 \times 4$$

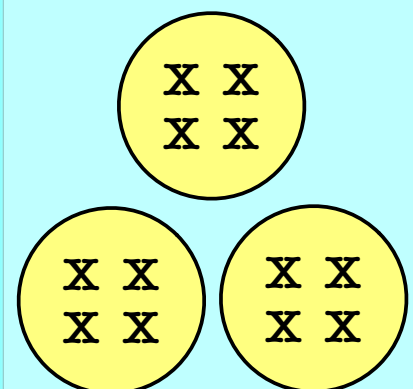
$$4 \times 3$$

X X X
X X X
X X X
X X X

X X X X
X X X X
X X X X
X X X X

Four
groups
of three

Three
groups
of four






 $3 + 3 + 3 + 3 + 3$










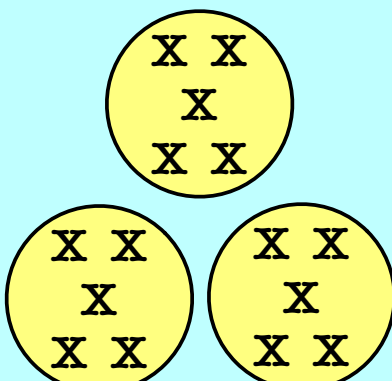

 $5 + 5 + 5$



 3×5



 5×3



X X X
X X X
X X X
X X X
X X X

X X X X X
X X X X X
X X X X X

Five
groups
of three

Three
groups
of five








$$4 + 4 + 4 + 4 + 4$$



$$5 + 5 + 5 + 5$$


$$4 \times 5$$


$$5 \times 4$$



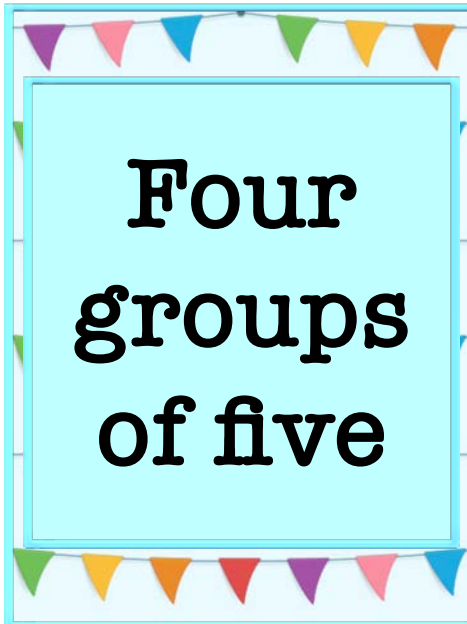
X X X X
X X X X
X X X X
X X X X
X X X X



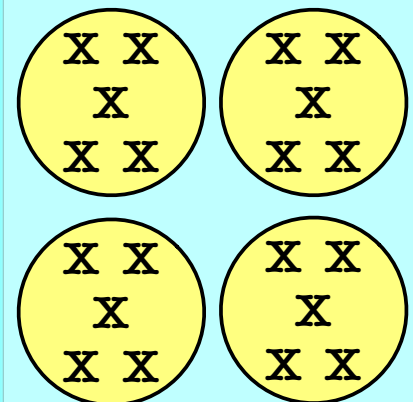
X X X X X
X X X X X
X X X X X
X X X X X
X X X X X



Five
groups
of four



Four
groups
of five



X X X X
X X X X
X X X X
X X X X
X X X X

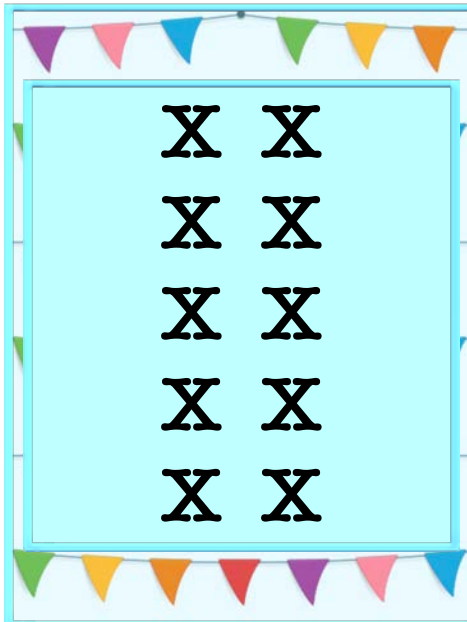



$$2 + 2 + 2 + 2 + 2$$



$$5 + 5$$


$$2 \times 5$$



$$5 \times 2$$




X X
X X
X X
X X
X X



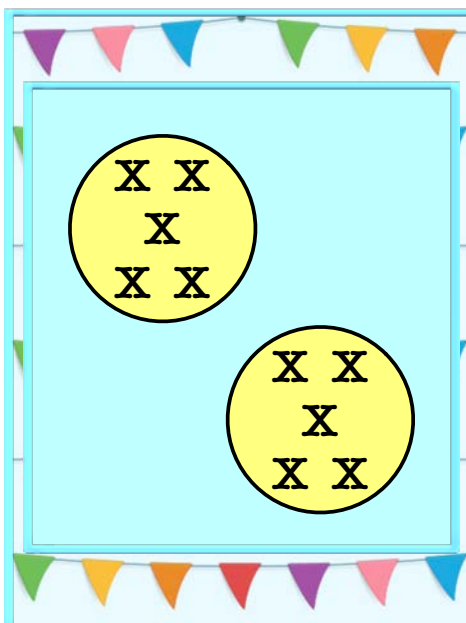
X X X X X
X X X X X



Five
groups
of two




Two
groups
of five




X X
X
X X

X X
X
X X


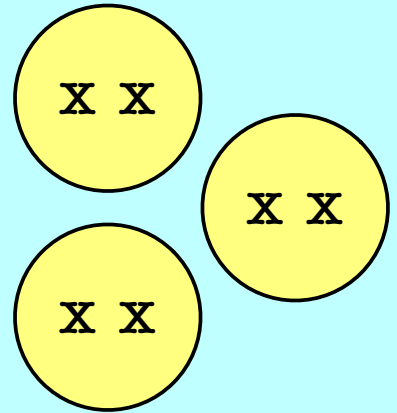





How many legs?




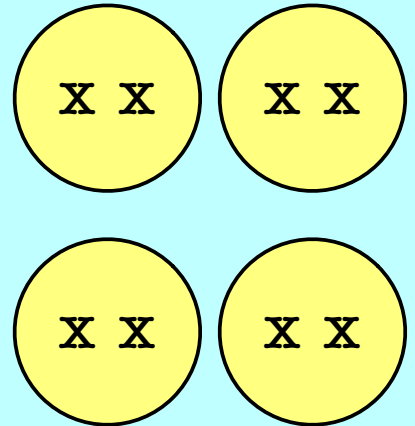
How many legs?



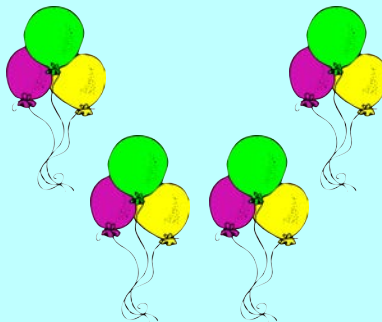
How many spots?



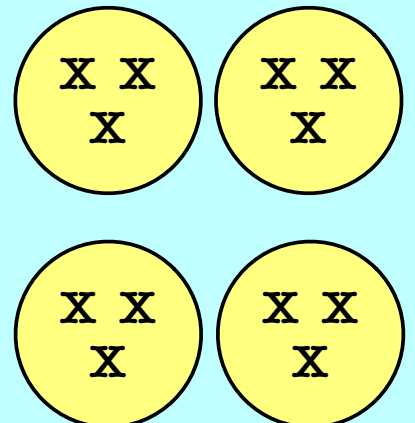
How many feet?



How many legs?



How many balloons?





How many candles?

How many feet?

How many X's?

How many spots?

How many candles?

How many X's?

How many candles?

How many balloons?

How many X's?





$2 + 2$



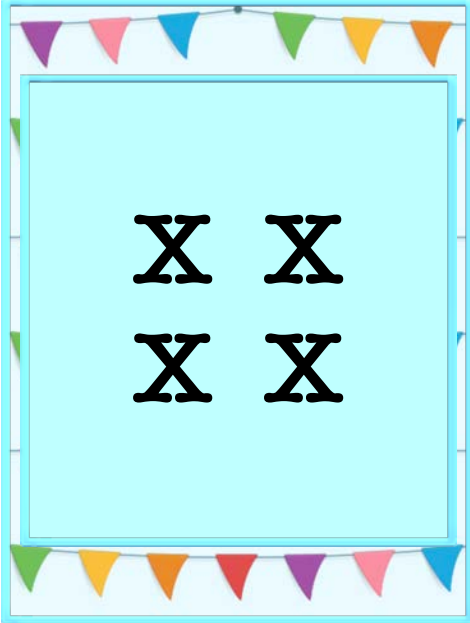
2×2




$3 + 3 + 3$



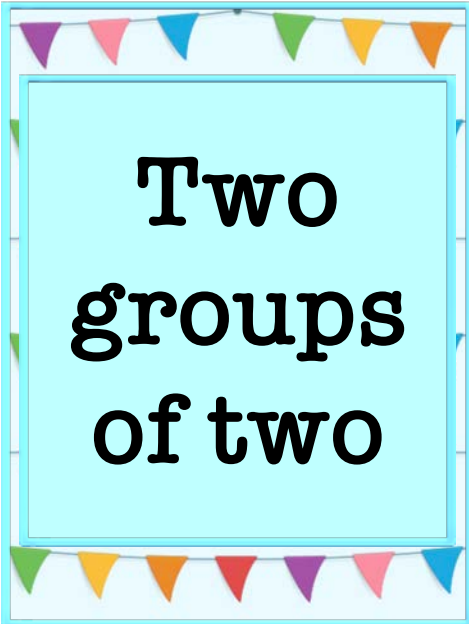
3×3



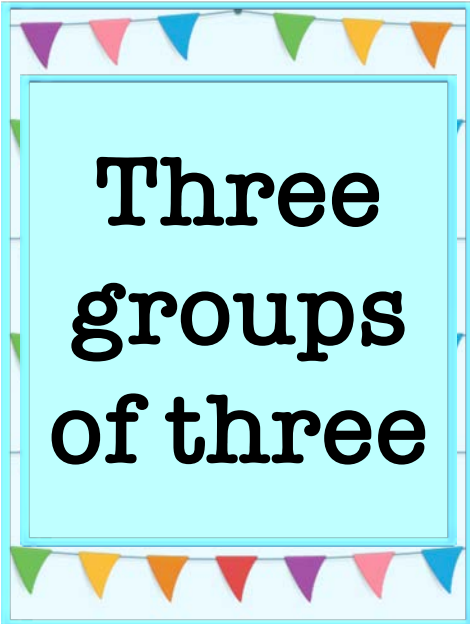
$\begin{array}{cc} X & X \\ X & X \end{array}$



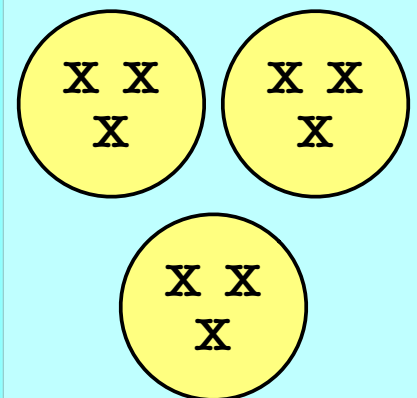
$\begin{array}{ccc} X & X & X \\ X & X & X \\ X & X & X \end{array}$



Two
groups
of two




Three
groups
of three




$\begin{array}{cc} X & X \\ X & X \end{array}$ $\begin{array}{cc} X & X \\ X & X \end{array}$
 $\begin{array}{cc} X & X \\ X & X \end{array}$


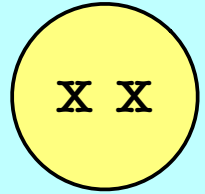
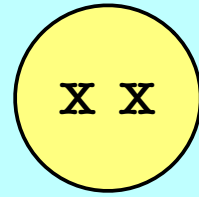




How many legs?



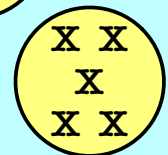
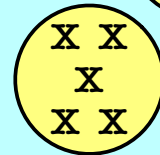


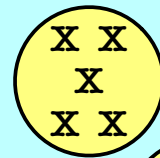
How many legs?





How many spots?



How many candles?



Multiplier Magician







$$4 + 4 + 4 + 4$$



$$5 + 5 + 5 + 5 + 5$$


$$4 \times 4$$

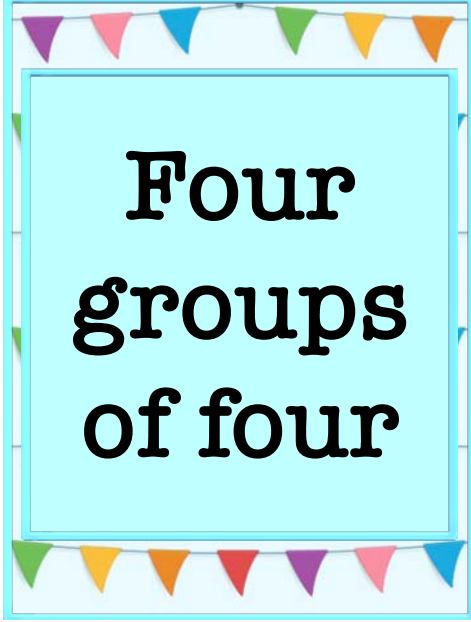

$$5 \times 5$$



X X X X X
X X X X X
X X X X X
X X X X X
X X X X X



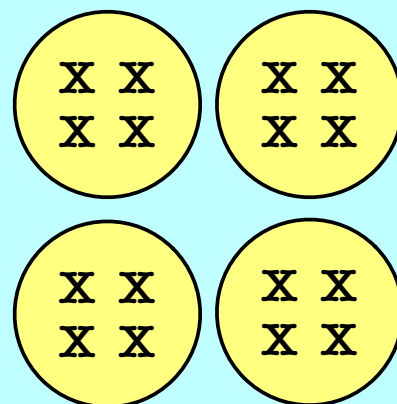
X X X X
X X X X
X X X X
X X X X
X X X X



Four
groups
of four



Five
groups
of five



X X X X
X X X X
X X X X
X X X X

