

Start	1	2	3	4	5	6	7	8	9	10	11	12	13
52	53	54	55	56	57	58	59	60	61	62	63	64	65
51	90	91	92	93	94	94	95	96	97	98	99	100	101
50	89	88	87	86	85	84	83	82	81	80	79	78	77
49	89	88	87	86	85	84	83	82	81	80	79	78	77
48	88	87	86	85	84	83	82	81	80	79	78	77	76
47	87	86	85	84	83	82	81	80	79	78	77	76	75
46	86	85	84	83	82	81	80	79	78	77	76	75	74
45	85	84	83	82	81	80	79	78	77	76	75	74	73
44	84	83	82	81	80	79	78	77	76	75	74	73	72
43	83	82	81	80	79	78	77	76	75	74	73	72	71
42	82	81	80	79	78	77	76	75	74	73	72	71	70
41	82	81	80	79	78	77	76	75	74	73	72	71	70
40	39	38	37	36	35	34	33	32	31	30	29	28	27



Hop to 100

Start	100	99	98	97	96	95	94	93	92	91	90	89	88
-------	-----	----	----	----	----	----	----	----	----	----	----	----	----

49	48	47	46	45	44	43	42	41	40	39	38
----	----	----	----	----	----	----	----	----	----	----	----

50	51	52	53	54	55	56	57	58	59	60	61	62	63	64	65	66	67	68	69	70	71	72	73	74
----	----	----	----	----	----	----	----	----	----	----	----	----	----	----	----	----	----	----	----	----	----	----	----	----

11	10	9	8	7	6	5	4
----	----	---	---	---	---	---	---

12	13	14	15	16	17	18	19	20	21	22	23	24	25	26	27	28	29	30	31	32	33	34	35	36	37	38
----	----	----	----	----	----	----	----	----	----	----	----	----	----	----	----	----	----	----	----	----	----	----	----	----	----	----

3	2	1	0
---	---	---	---

4	3	2	1	0
---	---	---	---	---

4	3	2	1	0
---	---	---	---	---



Hop to 0

11	10	9	8	7	6	5	4	3	2	1	0
----	----	---	---	---	---	---	---	---	---	---	---

50	51	52	53	54	55	56	57	58	59	60	61	62	63	64	65	66	67	68	69	70	71	72	73	74
----	----	----	----	----	----	----	----	----	----	----	----	----	----	----	----	----	----	----	----	----	----	----	----	----

Kelly puts cookies in the oven at 3:10 PM. She takes them out of the oven at 3:19 PM. How many minutes did the cookies take to bake?

Angelo buys two chocolate bunnies that cost \$2.00 each. If he started with \$5.00, how many dollars will he have after he pays for the bunnies?

You have 32 candies. You give 10 candies to your sister, 10 to your brother, and eat 10. How many candies do you have left?

You have 50¢ but the toy you want costs 57¢. How many more cents do you need?

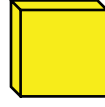
It is 3:00 PM. Eli has to be in bed by 10:00 PM. How many hours until Eli's bedtime?

You have \$10.75. You buy a candy bar that costs \$1.75. How much money do you have left?

Jing has 25¢. She only has nickels. How many nickels does she have?

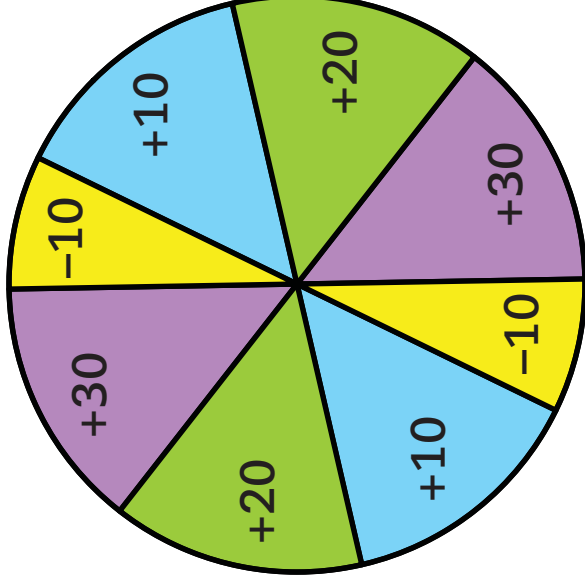
Hannah has 92 pennies. She is trying to collect 100 pennies. How many pennies does she still need?

A cube has _____ faces.

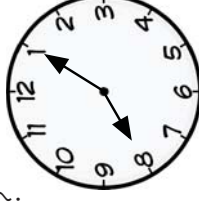


Kay has 45¢. She has 1 quarter, 2 nickels, and how many dimes?

Hop to 100 Spinner



This clock shows 5 minutes past what hour?



I am an odd number. I am greater than 3 and less than 6. What number am I?

It's 9:10 AM. Steve woke up at 6:10 AM. How many hours has Steve been awake?

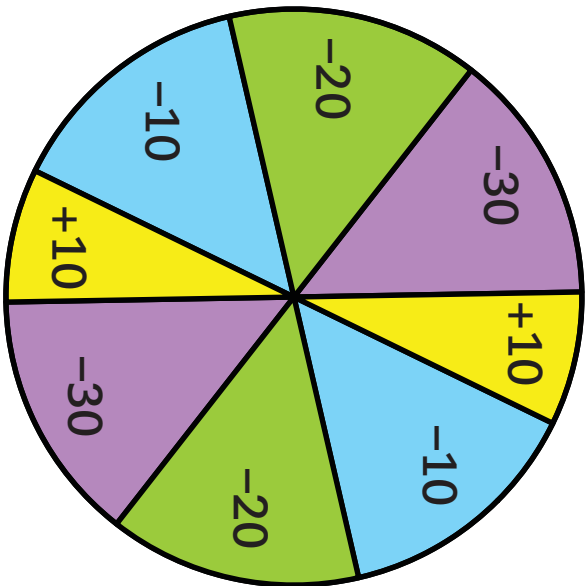
A triangle has _____ angles.



What time will it be in 45 minutes?



Hop to 0 Spinner



Hop-to-It



Hop-to-It



Hop-to-It



Hop-to-It



Hop-to-It



Hop-to-It



Hop-to-It



Hop-to-It



Hop-to-It



Hop-to-It



Hop-to-It



Hop-to-It



Hop-to-It



Hop-to-It



Hop-to-It



Hop-to-It

