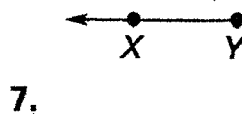
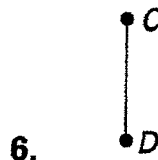
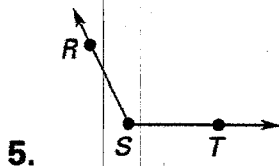


Name _____

Date _____

Practice and Apply

Name each geometric figure. Use symbols where possible.



ANSWER BANK

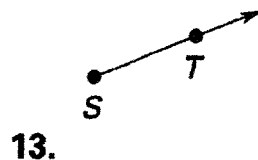
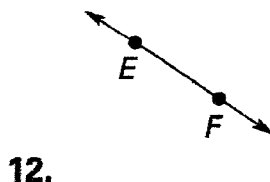
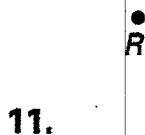
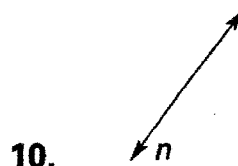
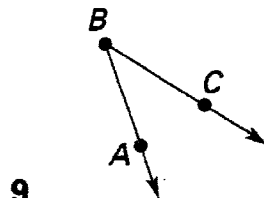
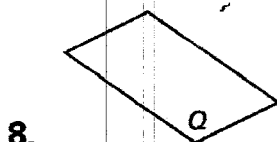
\overleftrightarrow{Q}
 \overleftrightarrow{EF}

n

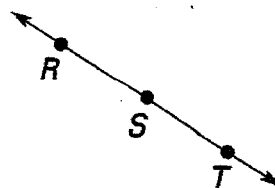
$\angle RST$
 \overrightarrow{ST}

POINT
 \overline{CD}

$\angle ABC$
 \overrightarrow{XY}



Use this figure to answer Exercises 14–16.




14. Name the line in three different ways.

15. Name three line segments.

16. Name three rays.

_____ e?



Closed Strategies