

Name ANSWER KEY Period _____

American Imperialism Outline Map

Label the following bodies of water and land areas on the accompanying outline map on the **back side** of this paper.


Bodies of Water	U.S. Possessions and Protectorates		Other Areas
Pacific Ocean Atlantic Ocean Caribbean Sea	Cuba Guam Hawaii Panama Canal Zone Midway Island	Philippines Puerto Rico Samoa Wake Island Alaska	Japan Australia South America United States

Label the following **Latin American and Caribbean** countries on the map below.

- | | | | | |
|--------------|---------------|-----------|----------------------|------------|
| - Columbia | - Cuba | - Mexico | - Panama | - Honduras |
| - Nicaragua | - Guatemala | - Jamaica | - Haiti | |
| - Costa Rica | - Puerto Rico | - Bahamas | - Dominican Republic | |



U.S. Territorial Influence, 1914



Name _____ Period _____

American Imperialism Outline Map

(pgs. A8+A9, A14+A15, A28)

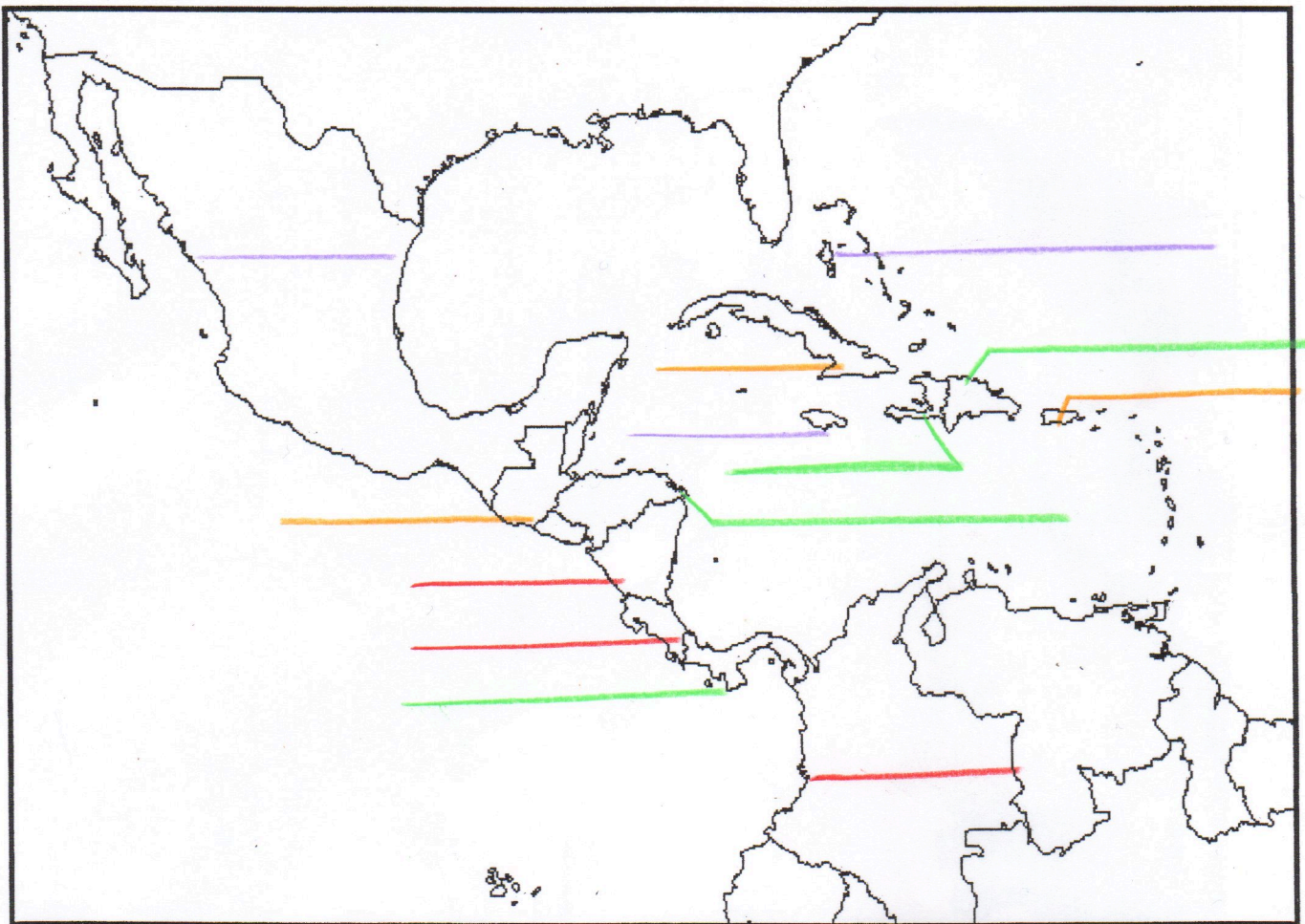
Label the following bodies of water and land areas on the accompanying outline map on the back side of this paper. p. 28

Bodies of Water	U.S. Possessions and Protectorates		Other Areas
<ul style="list-style-type: none"> Pacific Ocean Atlantic Ocean Caribbean Sea 	<ul style="list-style-type: none"> Cuba Guam Hawaii Panama Canal Zone Midway Island 	<ul style="list-style-type: none"> Philippines Puerto Rico Samoa Wake Island Alaska 	<ul style="list-style-type: none"> Japan Australia South America United States

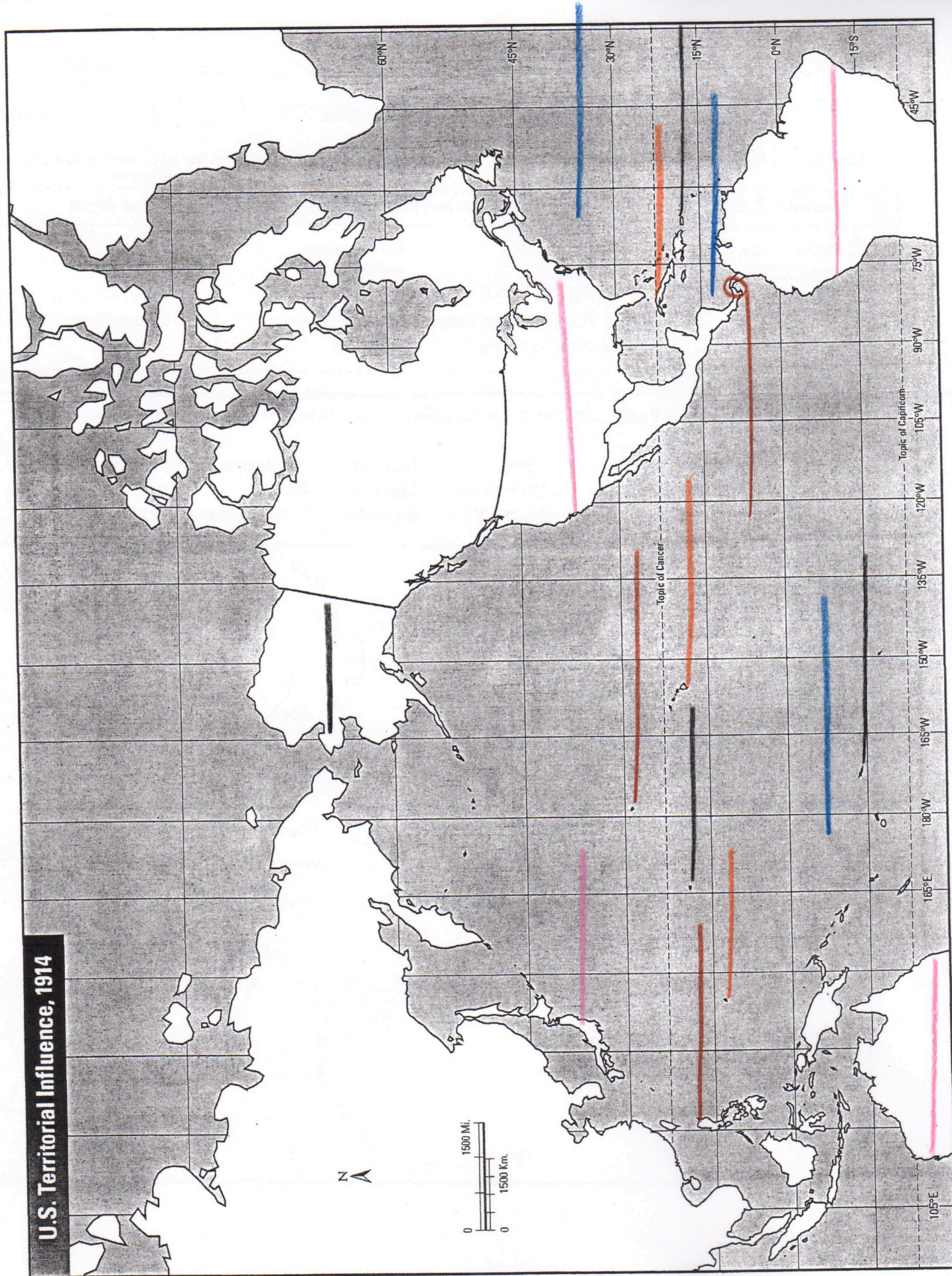
Label the following **Latin American and Caribbean** countries on the map below.

- | | | | | |
|--------------|---------------|-----------|----------------------|------------|
| ● Columbia | ● Cuba | ● Mexico | ● Panama | ● Honduras |
| ● Nicaragua | ● Guatemala | ● Jamaica | ● Haiti | |
| ● Costa Rica | ● Puerto Rico | ● Bahamas | ● Dominican Republic | |

A8+A9
281



Choice Strategy



Choice Strategy

American Imperialism Outline Map

(pgs. A8+A9, A14+A15, A28)

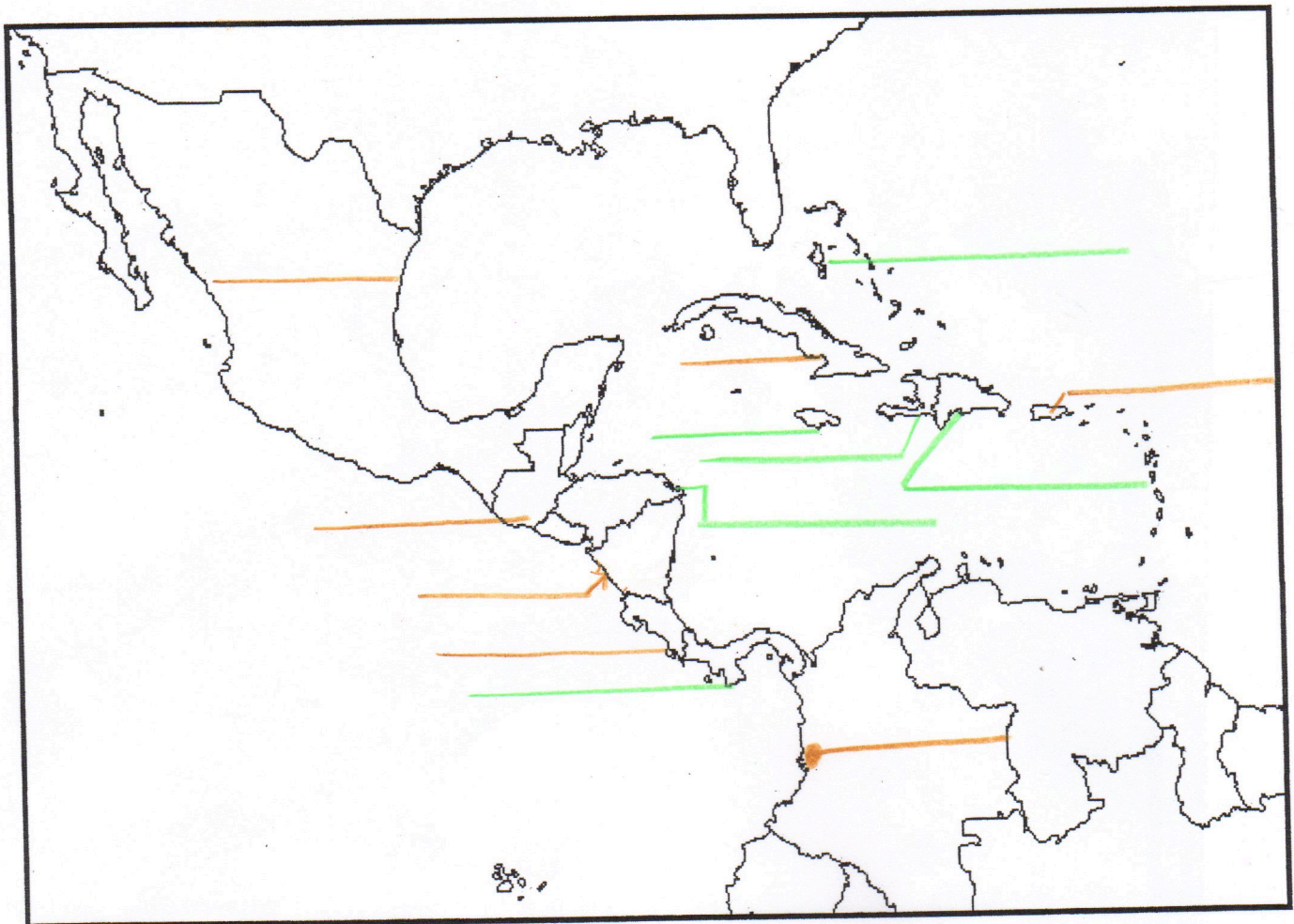
Label the following bodies of water and land areas on the accompanying outline map on the **back side** of this paper.

Bodies of Water	U.S. Possessions and Protectorates		Other Areas
<ul style="list-style-type: none"> Pacific Ocean Atlantic Ocean Caribbean Sea 	<ul style="list-style-type: none"> Cuba Guam Hawaii Panama Canal Zone Midway Island 	<ul style="list-style-type: none"> Philippines Puerto Rico Samoa Wake Island Alaska 	<ul style="list-style-type: none"> Japan Australia South America United States

Label the following **Latin American and Caribbean** countries on the map below.

- | | | | | |
|--------------|---------------|-----------|----------------------|------------|
| ● Columbia | ● Cuba | ● Mexico | ● Panama | ● Honduras |
| ● Nicaragua | ● Guatemala | ● Jamaica | ● Haiti | |
| ● Costa Rica | ● Puerto Rico | ● Bahamas | ● Dominican Republic | |

A8+A9
281



Closed Strategy

Name _____ Period _____

American Imperialism Outline Map

(pgs. A8+A9, A14+A15, p. 281)

Label the following bodies of water and land areas on the accompanying outline map on the **back side** of this paper.

Bodies of Water	U.S. Possessions and Protectorates		Other Areas
Pacific Ocean Atlantic Ocean Caribbean Sea	Cuba Guam Hawaii Panama Canal Zone Midway Island	Philippines Puerto Rico Samoa Wake Island Alaska	Japan Australia South America United States


Label the following **Latin American and Caribbean** countries on the map below.

Columbia	Cuba	Mexico	Panama	Honduras
Nicaragua	Guatemala	Jamaica	Haiti	
Costa Rica	Puerto Rico	Bahamas	Dominican Republic	

A8+A9
281



U.S. Territorial Influence, 1914



American Imperialism Outline Map

(pgs. A8+A9 (A14+A15)

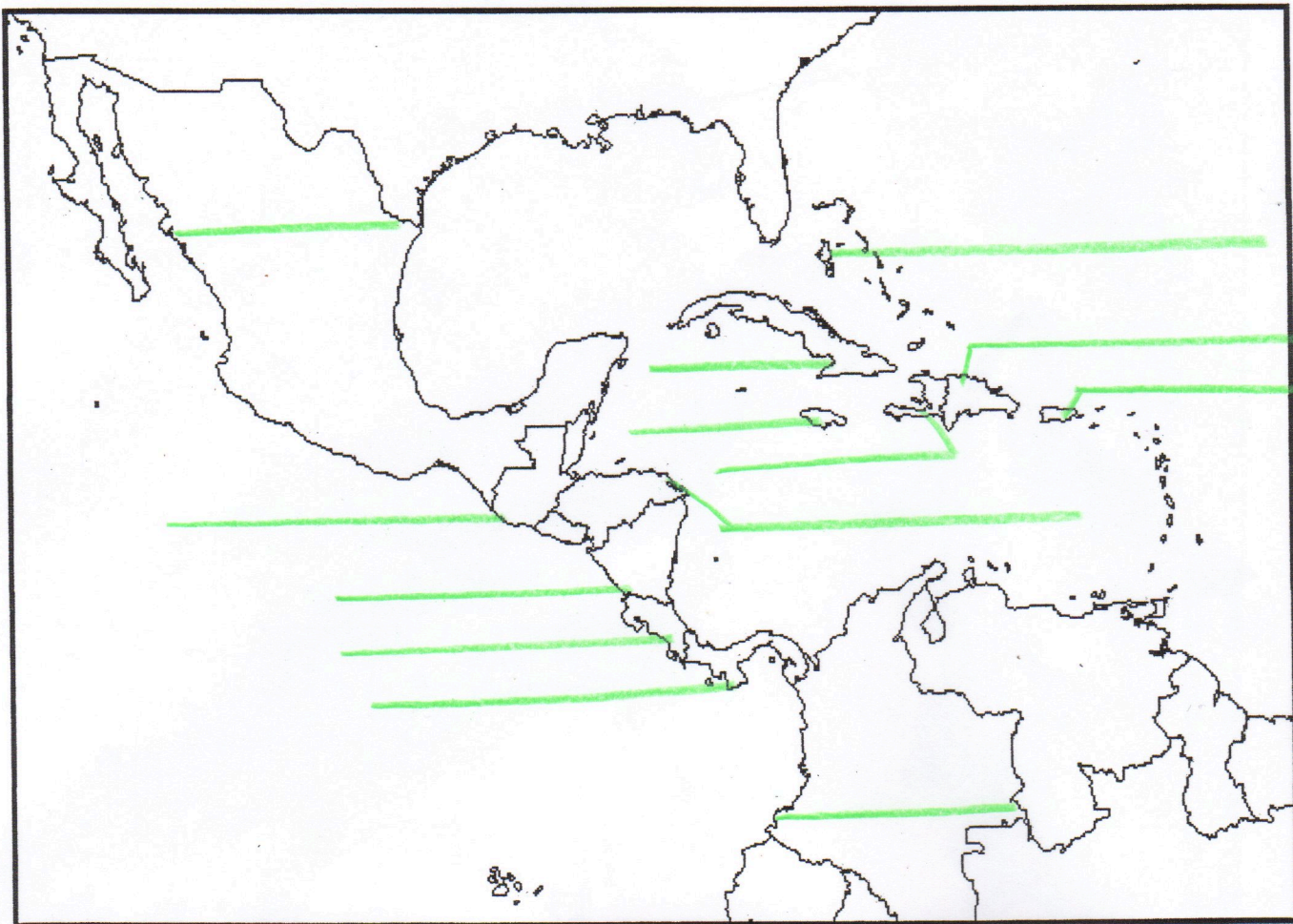
Label the following bodies of water and land areas on the accompanying outline map on the **back side** of this paper. #3

Bodies of Water	U.S. Possessions and Protectorates		Other Areas
<ul style="list-style-type: none"> Pacific Ocean Atlantic Ocean Caribbean Sea 	<ul style="list-style-type: none"> Cuba Guam Hawaii Panama Canal Zone Midway Island 	<ul style="list-style-type: none"> Philippines Puerto Rico Samoa Wake Island Alaska 	<ul style="list-style-type: none"> Japan Australia South America United States

Label the following **Latin American and Caribbean** countries on the map below.

- | | | | | |
|--------------|---------------|-----------|----------------------|------------|
| ● Columbia | ● Cuba | ● Mexico | ● Panama | ● Honduras |
| ● Nicaragua | ● Guatemala | ● Jamaica | ● Haiti | |
| ● Costa Rica | ● Puerto Rico | ● Bahamas | ● Dominican Republic | |

A8+A9
281



Visual Organization

Name _____ Period _____

American Imperialism Outline Map

(pgs. A8+A9 (A14+A15, 28)

Label the following bodies of water and land areas on the accompanying outline map on the **back side** of this paper.

Bodies of Water	U.S. Possessions and Protectorates		Other Areas
Pacific Ocean	Cuba	Philippines	Japan
Atlantic Ocean	Guam	Puerto Rico	Australia
Caribbean Sea	Hawaii	Samoa	South America
	Panama Canal Zone	Wake Island	United States
	Midway Island	Alaska	

Label the following **Latin American and Caribbean** countries on the map below.

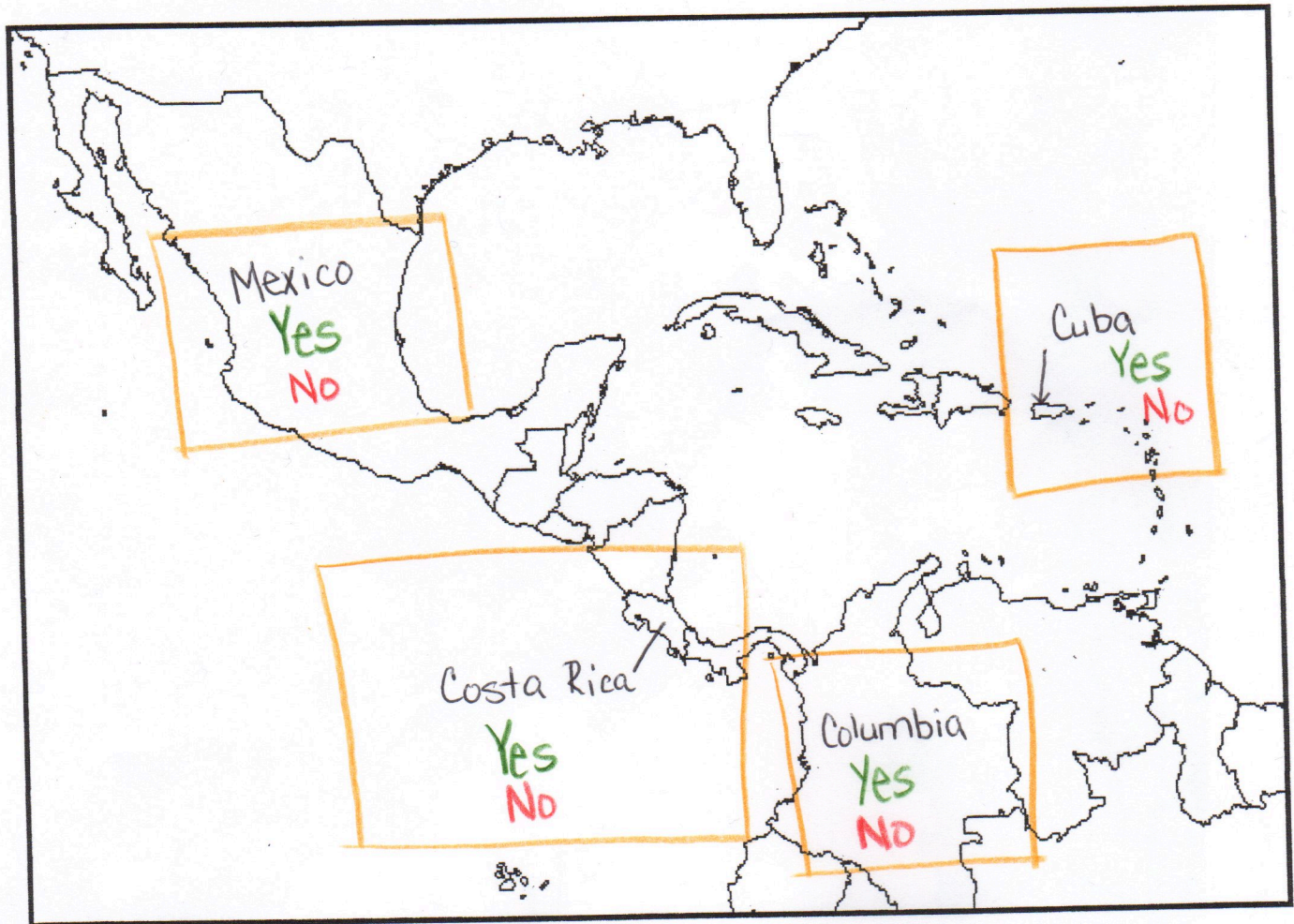
Columbia
~~Nicaragua~~
Costa Rica

Cuba
~~Guatemala~~
~~Puerto Rico~~

Mexico
~~Jamaica~~
~~Bahamas~~

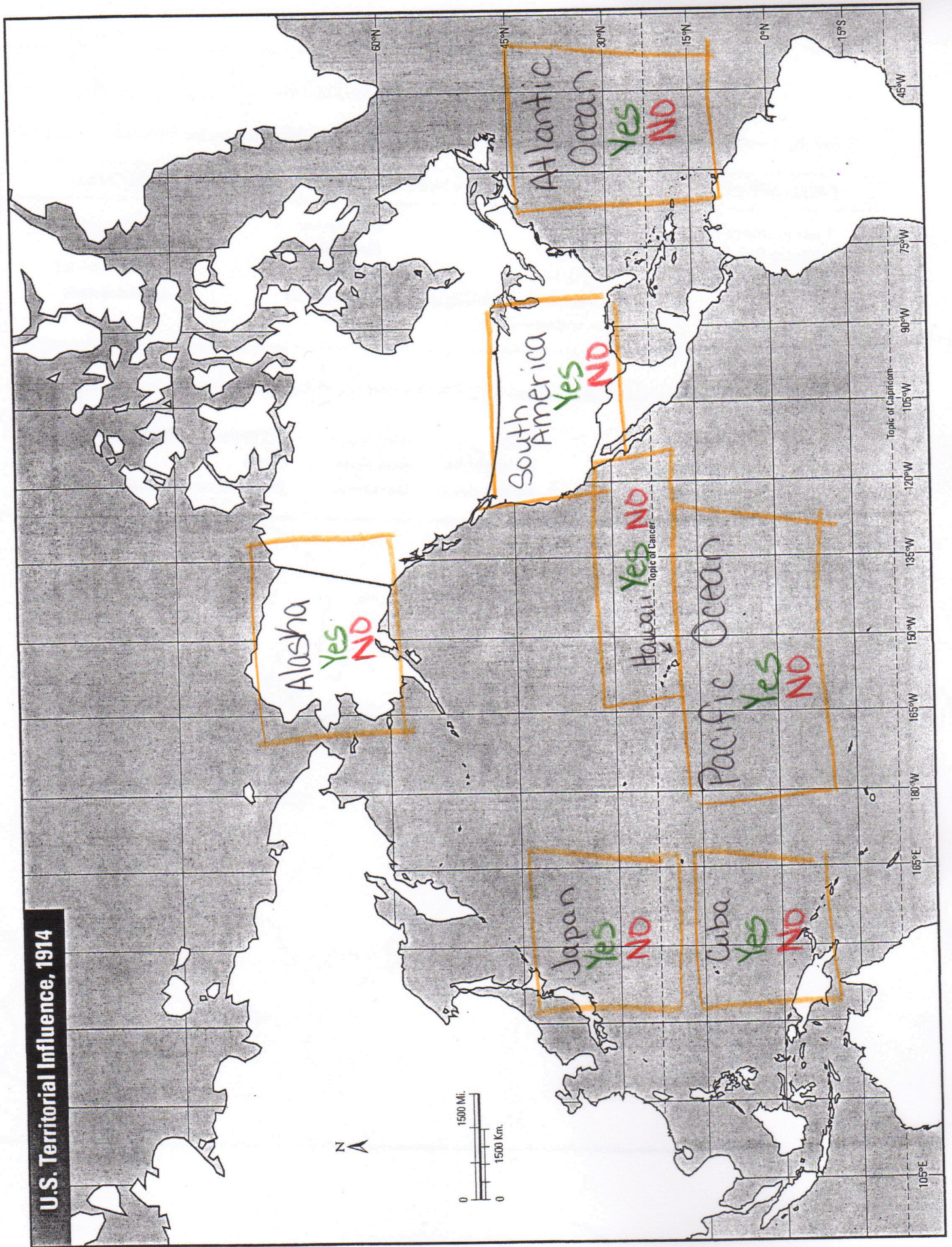
~~Panama~~ ~~Honduras~~
~~Haiti~~
~~Dominican Republic~~

A8+A9
281



Yes No Strategy

U.S. Territorial Influence, 1914



Yes No Strategy